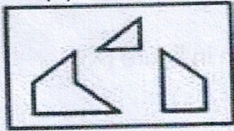


APTITUDE TEST

(1) Find out which of the figures (1), (2), (3) and (4) can be formed from the pieces given in figure (X).



(X)




(1) (2) (3) (4)

8
—
10

- ~~A.~~ 1
- B. 2
- C. 3
- D. 4

(2) Find out which of the figures (1), (2), (3) and (4) can be formed from the pieces given in figure (X).



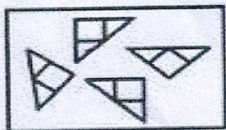
(X)



(1) (2) (3) (4)

- A. 1
- B. 2
- C. 3
- D. 4

(3) Find out which of the figures (1), (2), (3) and (4) can be formed from the pieces given in figure (X).



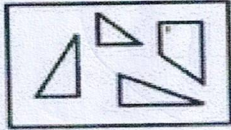
(X)



(1) (2) (3) (4)

- A. 1
- B. 2
- C. 3
- D. 4

(4) Find out which of the figures (1), (2), (3) and (4) can be formed from the pieces given in figure (X).



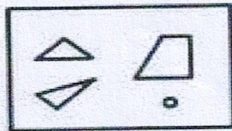
(X)



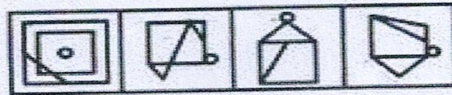
(1) (2) (3) (4)

- A. 1
- B. 2
- C. 3
- D. 4

(5) Find out which of the figures (1), (2), (3) and (4) can be formed from the pieces given in figure (X).



(X)



(1) (2) (3) (4)

- A. 1
- B. 2
- C. 3
- D. 4

(6) Find out how will the key figure (X) look like after rotation.



(X)



(1) (2) (3) (4)

- A. 1
- B. 2
- C. 3
- D. 4

(7) Find out how will the key figure (X) look like after rotation.



(X)



(1) (2) (3) (4)

~~A.~~ 1

B. 2

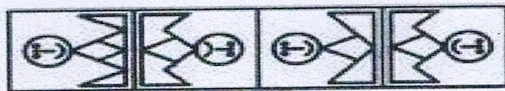
C. 3

D. 4

(8) Find out how will the key figure (X) look like after rotation.



(X)



(1) (2) (3) (4)

A. 1

B. 2

C. 3

~~D.~~ 4

(9) Find out how will the key figure (X) look like after rotation.



(X)



(1) (2) (3) (4)

A. 1

B. 2

C. 3

~~D.~~ 4

(10) Find out how will the key figure (X) look like after rotation.



(X)



(1) (2) (3) (4)

A. 1

B. 2

C. 3

D. 4