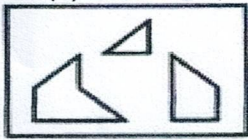


Rupesh M

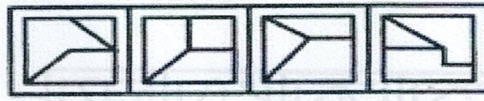
APTITUDE TEST

4
10


(1) Find out which of the figures (1), (2), (3) and (4) can be formed from the pieces given in figure (X).



(X)



(1) (2) (3) (4)




(X)

- A. 1
- B. 2
- C. 3
- D. 4




(2) Find out which of the figures (1), (2), (3) and (4) can be formed from the pieces given in figure (X).



(X)



(1) (2) (3) (4)

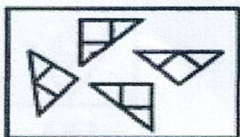


(X)

- A. 1
- B. 2
- C. 3
- D. 4



(3) Find out which of the figures (1), (2), (3) and (4) can be formed from the pieces given in figure (X).



(X)



(1) (2) (3) (4)

(6) Find out how will the key figure

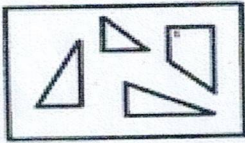


(X)

- A. 1
- B. 2
- C. 3
- D. 4



(4) Find out which of the figures (1), (2), (3) and (4) can be formed from the pieces given in figure (X).



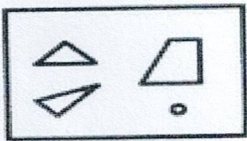
(X)



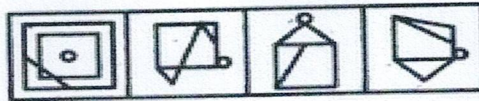
(1) (2) (3) (4)

- A. 1
- ~~B. 2~~
- C. 3
- D. 4

(5) Find out which of the figures (1), (2), (3) and (4) can be formed from the pieces given in figure (X).




(X)



(1) (2) (3) (4)

- A. 1
- B. 2
- C. 3
- ~~D. 4~~

(6) Find out how will the key figure (X) look like after rotation.



(X)



(1) (2) (3) (4)

- A. 1
- B. 2
- C. 3
- ~~D. 4~~



(7) Find out how will the key figure (X) look like after rotation.



(X)



(1)

(2)

(3)

(4)

A. 1

B. 2

C. 3

D. 4

(8) Find out how will the key figure (X) look like after rotation.



(X)



(1)

(2)

(3)

(4)

A. 1

B. 2

C. 3

D. 4

(9) Find out how will the key figure (X) look like after rotation.



(X)



(1)

(2)

(3)

(4)

A. 1

B. 2

C. 3

D. 4

(10)

Find out how will the key figure (X) look like after rotation.



(X)



(1)

(2)

(3)


(4)

~~A.~~ 1

B. 2

C. 3

D. 4




(1)

(2)

(3)

(4)



(X)

A. 1

B. 2

C. 3

D. 4



(1)

(2)

(3)

(4)



(X)

A. 1

B. 2

C. 3

D. 4



(1)

(2)

(3)

(4)



(X)

A. 1

B. 2

C. 3

D. 4

Find out how will the key figure (X) look like after rotation.

(10)