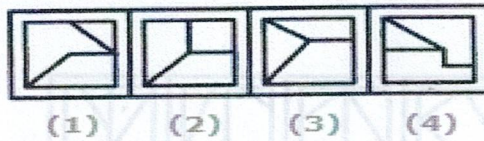
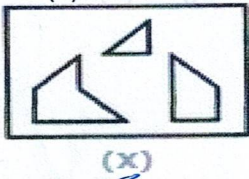


**APTITUDE TEST**

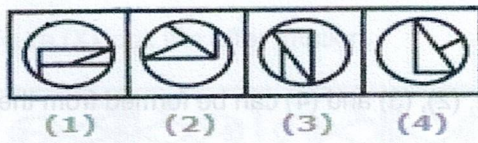
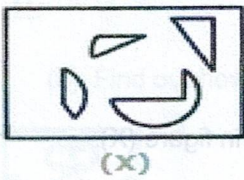
(1) Find out which of the figures (1), (2), (3) and (4) can be formed from the pieces given in figure (X).



6/10

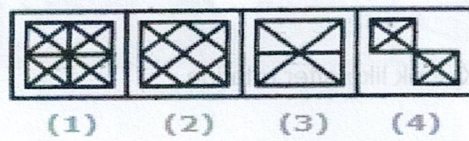
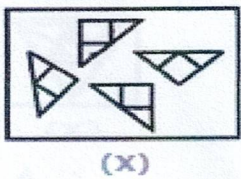
- A. 1
- B. 2
- C. 3
- D. 4

(2) Find out which of the figures (1), (2), (3) and (4) can be formed from the pieces given in figure (X).




- A. 1
- B. 2
- C. 3
- D. 4

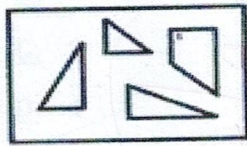
(3) Find out which of the figures (1), (2), (3) and (4) can be formed from the pieces given in figure (X).



- A. 1
- B. 2
- C. 3
- D. 4



(4) Find out which of the figures (1), (2), (3) and (4) can be formed from the pieces given in figure (X).



(X)



(1)

(2)

(3)

(4)

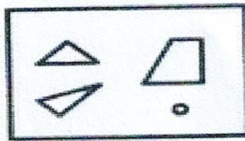
A. 1

B. 2

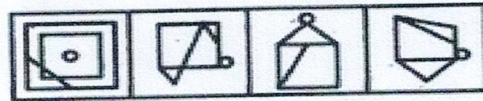
C. 3

D. 4

(5) Find out which of the figures (1), (2), (3) and (4) can be formed from the pieces given in figure (X).



(X)



(1)

(2)

(3)

(4)


A. 1

B. 2

C. 3

D. 4

(6) Find out how will the key figure (X) look like after rotation.



(X)



(1)

(2)

(3)

(4)

A. 1

B. 2

C. 3


D. 4



(7) Find out how will the key figure (X) look like after rotation.



(X)



(1)

(2)

(3)

(4)

A. 1

B. 2

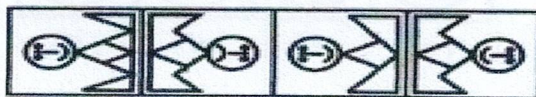
C. 3

D. 4

(8) Find out how will the key figure (X) look like after rotation.



(X)



(1)

(2)

(3)

(4)

A. 1

B. 2

C. 3

D. 4

(9) Find out how will the key figure (X) look like after rotation.



(X)



(1)

(2)

(3)

(4)

A. 1

B. 2

C. 3

D. 4

(10) Find out how will the key figure (X) look like after rotation.



(X)



(1)

(2)

(3)


(4)

A. 1

B. 2

C. 3

D. 4



(1)

(2)

(3)

(4)




(X)

A. 1

B. 2

C. 3

D. 4



(1)

(2)

(3)

(4)



(X)

A. 1

B. 2

C. 3

D. 4



(1)

(2)

(3)

(4)



(X)

A. 1

B. 2

C. 3

D. 4